

Year 1 Willow Class

Please check your emails
for your daily teams
calls.

Monday 1st March 2021

Thanks for not printing this page!

9:00-
9:15




9:15-
10:00




10:00
-10:15



10:15-
11:00



11:00-
12:00



12:00
-12:45




12:45-
1:30



1:30-
2:00



2:00-
3:00

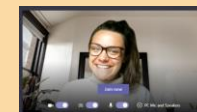
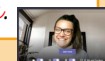


Please photograph and send any
completed work to
willow@newvalleyprimary.com



Video call

Check your emails for your
new smaller group video
call reading time.



Video call

Thanks for not printing this page!




MONDAY
01.03.2021



English

This week we are reading the book
The Storm Whale by Benji Davies.
This is the same author that wrote
Grandad's Island!



Today's lesson:

Learning Objective: I can use
expanded noun phrases.

Click here to find today's lesson!



Vipers

Vipers is a lesson that focuses on
different reading skills.

Click here for the Vipers questions.



Fine motor & handwriting

Click here for your handwriting/ fine
motor activities for today!



Wider Curriculum

Science

Materials

Lesson 6: Which material is best for
different objects?

Lesson link:

<https://classroom.thenational.academy/lessons/which-material-is-best-for-different-objects-60vkar>



Music

Pulse



Lesson 6: Identifying tempo:
terminology

Lesson link:

<https://classroom.thenational.academy/lessons/identifying-tempo-terminology-cnr66r>



PE

Join in with some yoga to
help build your core
strength!



Phonics

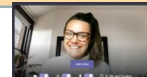
Afternoon video call. You will need a pencil,
some paper...and your Fred fingers! For the
rest of the time that you are not on the call,
please go to Bug Club to read a book or
find an additional phonics RWI video by
clicking on the picture below.



Read Write Inc.



Maths



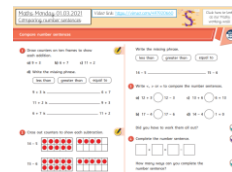
Please join the video call for an
additional maths fluency session.

To find the main lesson, please
follow the White Rose website links
to find the teaching video and
worksheet.

LO: I can compare number
sentences.


Click on the picture
for the Maths slide.

Click here for the extra
Maths challenge!



Spellings

Click here to go to
spellings



Remember to include lots of
exercise breaks within your day.



CROYDON
SCHOOL
SPORT
PARTNERSHIPS



Click on the
Croydon CSSP
to find daily
activity
videos.



Maths Learning Journey

Addition/ Subtraction to 20

$6 + 4 = 10$

$16 + 4 = 20$

$3 + 5 = 8$

$13 + 5 = 18$

$13 + 5 = 18$

Find and make number bonds.

Add ones using number bonds

$15 + 3 = 18$

Addition is commutative.

Eva has 13 tokens. She wins 5 more. How many does she have now?



There are 9 children on the bus. 5 more get on. How many are there now?

$9 + 5 = 14$

Add by counting on

Addition is commutative. Start with the greater number.

START

5 6, 7, 8

5 and 3 more equals 8.

$5 + 3 = 8$

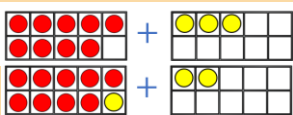


Password: willow

Thanks for not printing this page!

Addition

altogether double
add sum
plus (+) and
near double



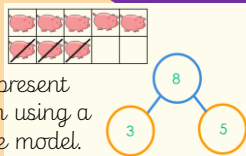
$9 + 3$ is equal to $10 + 2$

Add by making 10

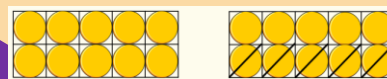
$7 + 8$
 $(3) (5)$

The number 8 has been partitioned into 3 and 5 so that the first tens frame can be made into 10. Then it is easy to do $10 + 5$

Subtraction – not crossing 10



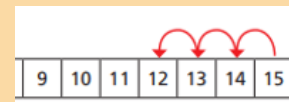
We can represent subtraction using a part-whole model.



Crossing out the numbers that you are taking away.

$15 - 5 = 10$

Subtraction – not crossing 10 (counting back)



Using a number track, you can count back. Don't count the first number.



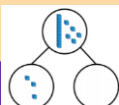
Subtraction – crossing 10



You have to cross ten, so you need to partition the subtrahend.
 $13 - 5 =$
 $13 - 3 = 10$ (count back 3 to 10)
 $10 - 2 = 8$ (count back the remaining 2)

Related facts

$15 - \underline{\quad} = 3$
 $15 - 3 = \underline{\quad}$
 $3 + \underline{\quad} = 15$
 $\underline{\quad} + 3 = 15$



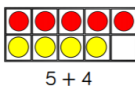
$12 - 5$
 $(2) (3)$
 $10 - 3 = 7$



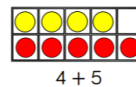
We are here!

END

Compare number sentences



is more than
is less than
is equal to



$5 + 4$

$4 + 5$

Subtraction

take away half

less distance between

halfway half

difference subtract minus (-)

sub



Compare number sentences



- 1 Draw counters on ten frames to show each addition.

a) $9 + 3$ b) $6 + 7$ c) $11 + 2$

- d) Write the missing phrase.

less than

greater than

equal to

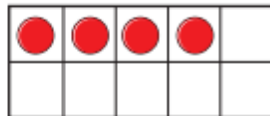
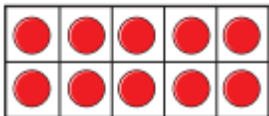
$9 + 3$ is _____ $6 + 7$

$11 + 2$ is _____ $9 + 3$

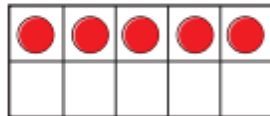
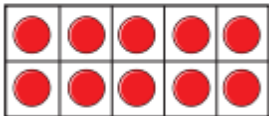
$6 + 7$ is _____ $11 + 2$

- 2 Cross out counters to show each subtraction.

$14 - 5$



$15 - 6$



Write the missing phrase.

less than

greater than

equal to

$14 - 5$ _____ $15 - 6$

- 3 Write $<$, $>$ or $=$ to compare the number sentences.

a) $12 + 3$ ○ $12 - 3$ c) $13 + 6$ ○ $6 + 13$

b) $17 - 4$ ○ $17 - 6$ d) $14 - 4$ ○ $1 + 0$

Did you have to work them all out?

- 4 Complete the number sentence.

□ + □ = □ - □

How many ways can you complete the number sentence?

Maths Monday 01.03.2021

Challenge Sheet



Question 2: Comparing number sentences

Choose the correct digit card to make the number sentences correct.

$$13 - 5 < 13 - \underline{\quad}$$

$$16 - 4 = \underline{\quad} + 4$$

$$9 + \underline{\quad} > 9 + 1$$

4

8

2

Question 3: Comparing number bonds (recap)

Dexter is working out which symbol to use to compare the number sentences.



$$14 - 5 \bigcirc 14 + 5$$

The missing symbol must be = because all of the numbers are the same.

Question 1: Comparing number sentences.

Choose the correct statement to compare the number sentences.

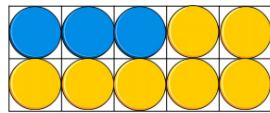
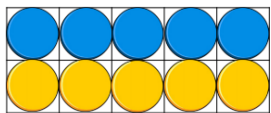
$$5 + 5$$

is more than

is less than


is equal to

$$3 + 7$$




Use < , > or = to compare the number sentences.

$$10 + 5$$



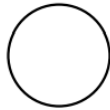
$$19 - 14$$

$$20 - 5$$



$$19 - 11$$

$$19 - 9$$



$$15 + 3$$




Do you agree with Dexter? Explain why.


Monday

Thanks for not printing this page!

English Working Wall The Storm Whale




Click on the picture on hear Miss Wingrave read the book.



Commas

LO: I can use expanded noun phrases.



Determiner adjective,
noun.

The fierce, crashing
waves.

determiner

adjective

noun

lots of yummy, cold ice cream

What is a
noun?

(naming word)
Boat
Sea
Paddle
Wave

What is an
adjective?

(describing word)
Crashing
Wooden
Big
Fierce

Where does the
adjective go?

The adjective goes
before the noun.

For example
The big wave.
The wooden boat.

What if I want to use more
than one adjective?

If you want to use two adjectives,
you need to use a comma after
your first adjective.
For example
The big, crashing wave.
The creaky, wooden boat.

Key Vocabulary

Expanded noun phrase
Noun – naming word
Adjective – describing
word

Thanks for not printing this page!




English

Monday's lesson:

Learning Objective: I can use expanded noun phrases.


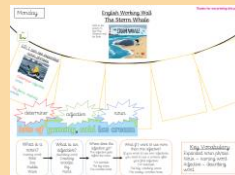
Look at this picture.
Discuss these questions
with someone at home.

- How would the characters would feel as they rowed out to sea?
- What would they see and experience on their journey?



Click on the front cover to listen to Miss Wingrave read the story.

Click here to find the working wall.



Activity:

Draw/ print a picture of Noi and his dad rowing out to sea. Label your pictures with expanded noun phrases describing their journey.



The creaky, wooden boat.

What is a noun?

(naming word)

Boat
Sea
Paddle
Wave

What is an adjective?

(describing word)

Crashing
Wooden
Big
Fierce

Where does the adjective go?

The adjective goes before the noun.

For example
The big wave.
The wooden boat.

What if I want to use more than one adjective?


If you want to use two adjectives, you need to use a comma after your first adjective.

For example
The big, crashing wave.
The creaky, wooden boat.

Vipers

Vipers is a lesson that focuses on different reading skills.

Discuss these questions with someone at home. Write your answers in full sentences.



Click on the picture to hear the book and open the pages you need .

Reading Vipers

Vocabulary
Infer
Predict
Explain
Retrieve
Sequence or Summarise



What does Noi take with him when he explores the beach?



Replace the word in bold with a synonym.
The whale was an **excellent** listener.



What stories might Noi tell the whale about the island?

Spelling – Monday

The long vowel sound /e/ can be spelt using 'ee' (what can you see). The letters 'ee' make a long vowel sound like in the word see.

Activity:

Add the missing 'ee' sound to these letters to create words.

Some might go in the middle and some might go at the end.

fl

tr

grn

mt

Add the missing 'ee' sound to these letters to create words. Some might go in the middle and some at the end

wk

s

fr

sh t

ft

sk

Spellings

feel

tree

green

meet

week

see

free

sheet

feet

seek

Monday


Handwriting & Fine Motor Activities

It is really important that we keep up the strength in our hands so that we can continue to develop our handwriting and writing stamina.

You will have fine motor activities and handwriting practice three times a week.

Trace over the letters and then have a go at writing them on your own. Remember to add a whoosh!

u



Have a go at some vegetable printing!

